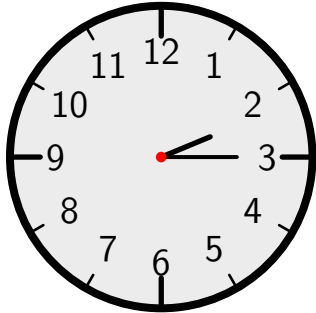


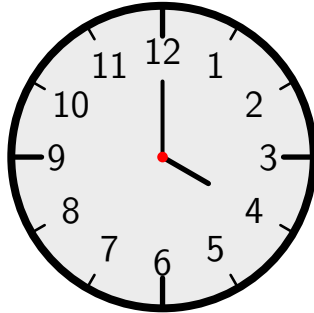
Arbeitsblatt Uhr

11. Oktober 2022

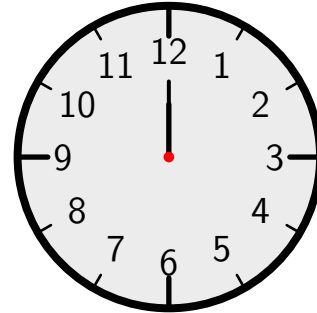
Lies ab!



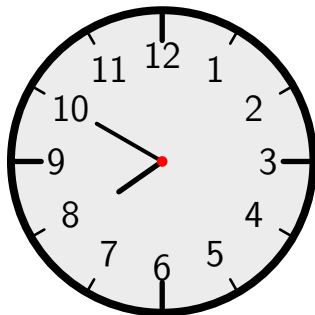
02:15
14:15
viertel 3



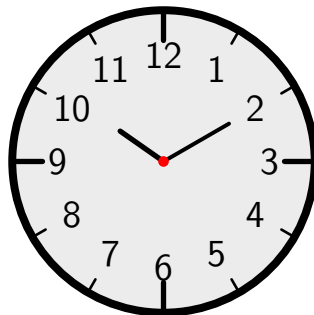
---:---
---:---



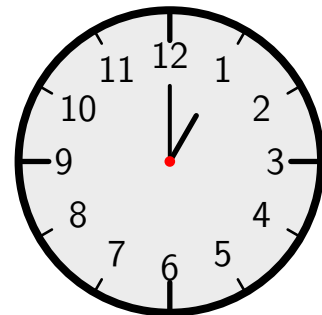
---:---
---:---



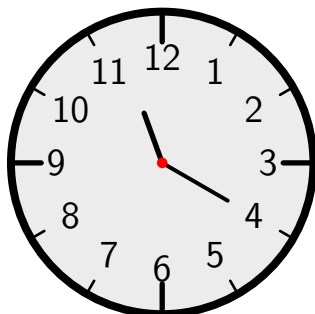
---:---
---:---



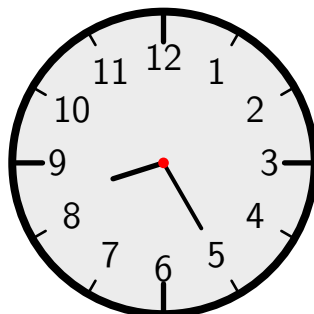
---:---
---:---



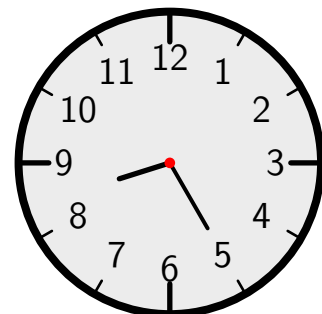
---:---
---:---



---:---
---:---

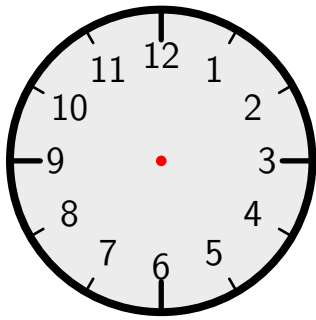


---:---
---:---



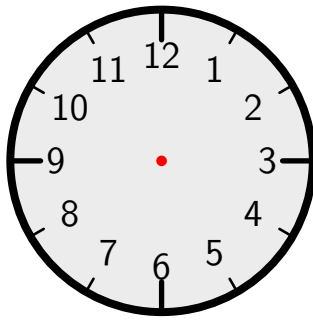
---:---
---:---

Zeichne ein!



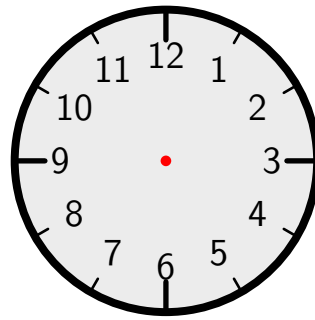
08:45

---:---



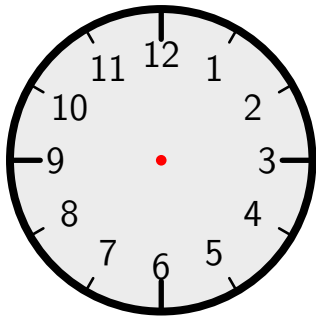
11:00

---:---



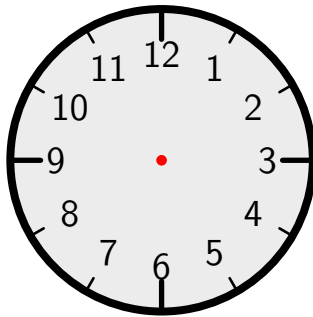
00:00

---:---



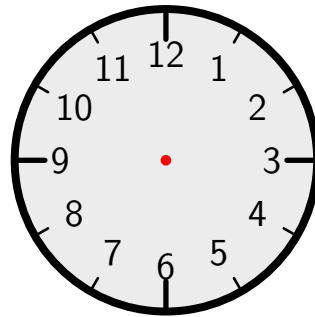
04:55

---:---



01:55

---:---



07:25

---:---

Berechne die Dauer!

a)

Ein Mann steigt um 14:10 in den Zug. Er fährt 2 Stunden und 10 Minuten. Wann kommt er an?

b)

Eine Frau bäckt Kuchen. Sie stellt den Kuchen um 10:35 Uhr in den Backofen. Um 11:45 Uhr ist der Kuchen fertig. Wie lange hat der Kuchen gebacken?

c)

Oma Eierschecke besucht ihre Enkel. Sie kommt um 19:45 Uhr am Bahnhof an. Ihr Zug fuhr 4 Stunden und 10 Minuten. Wann ist sie mit dem Zug gestartet?